


Arbeitsblatt für das Fach Mathe

Klasse 4

Maßeinheiten: Liter und Milliliter



Wie viel Liter sind es?



$\frac{1}{2}$ l




$\frac{1}{4}$ l



0,2 l

5 Flaschen Milch = _____ l 6 Dosen Cola = _____ l 7 Tassen Kaffee = _____ l

Wandle um in Milliliter (ml)!



6l = _____ ml

1,3l = _____ ml

0,7l = _____ ml


0,02l = _____ ml

$\frac{1}{4}$ l = _____ ml

$\frac{1}{8}$ l = _____ ml

$\frac{3}{4}$ l = _____ ml

$\frac{1}{2}$ l = _____ ml



Wandle um in Liter (l)! Benutze die Kommaschreibweise!

250ml = _____ l 1400ml = _____ l

125ml = _____ l 2050ml = _____ l

50ml = _____ l 25ml = _____ l

Lösung

Klasse 4

Maßeinheiten: Liter und Milliliter



5 Flaschen Milch =
2 1/2 l

6 Dosen Cola =
1 1/2 l

7 Tassen Kaffee =
1,4 l

6l = **6000** ml
1/4l = **250** ml

1,3l = **1300** ml
1/8l = **125** ml

0,7l = **700** ml
3/4 l = **750** ml

0,02l = **20** ml
1/2 l = **500** ml

Wandle um in Liter (l)! Benutze die Kommaschreibweise!

250 ml = **0,25** l
2050 ml = **2,05** l

1400ml = **1,4** l
50 ml = **0,05** l

125ml = **0,125** l
25 ml = **0,025** l

