


Arbeitsblatt für das Fach Mathe

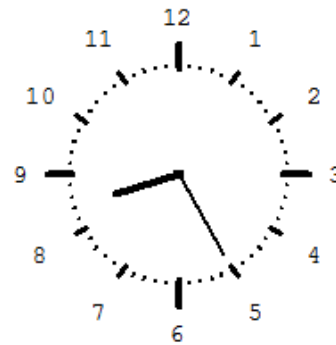
Klasse 2

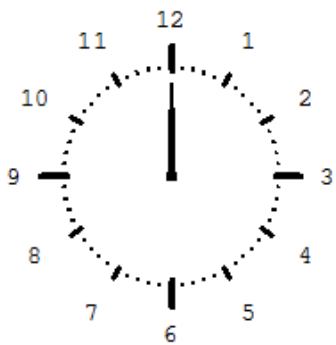
Die Uhr



Schreibe immer zwei Uhrzeiten auf!









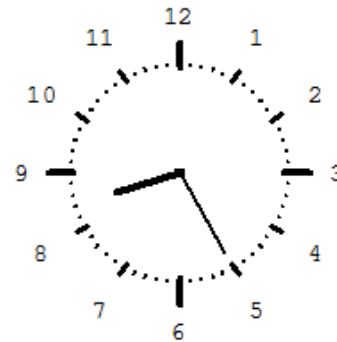
Lösung

Klasse 2

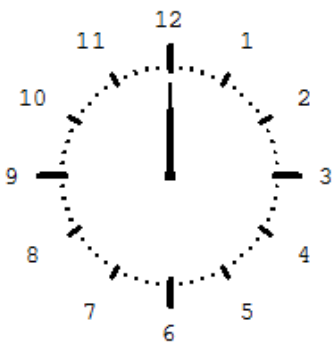
Die Uhr



12:30
0:30



8:25
20:25



12:00
0:00



15:15
3:15

