

Arbeitsblatt für das Fach Mathe

Klasse 2
Einmaleins



Rechne aus und markiere die richtige Anzahl an Feldern!

$7 \cdot 5 = \underline{\hspace{2cm}}$

$6 \cdot 8 = \underline{\hspace{2cm}}$

$5 \cdot 3 = \underline{\hspace{2cm}}$

$8 \cdot 8 = \underline{\hspace{2cm}}$

$3 \cdot 9 = \underline{\hspace{2cm}}$

$5 \cdot 9 = \underline{\hspace{2cm}}$




Lösung

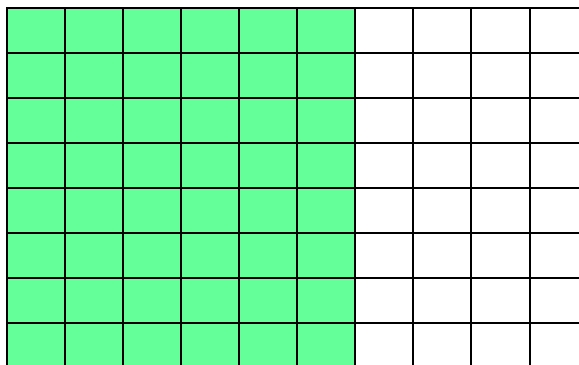
Klasse 2
Einmaleins



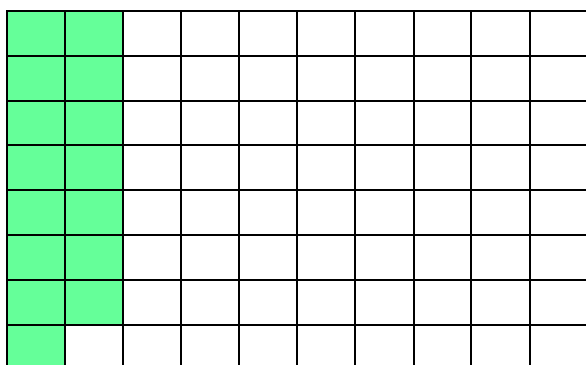
$7 \cdot 5 = 35$




$6 \cdot 8 = 48$




$5 \cdot 3 = 15$



$8 \cdot 8 = 64$



$3 \cdot 9 = 27$



$5 \cdot 9 = 45$

