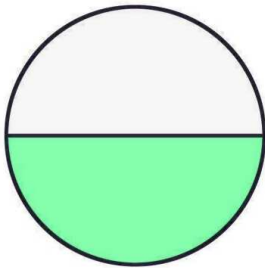
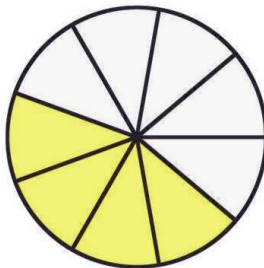

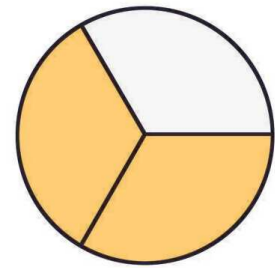


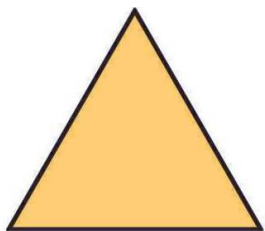
Schreibe die farbige Fläche als einen Bruch des Ganzen!

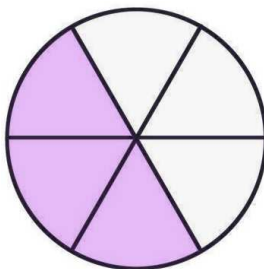


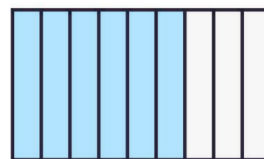


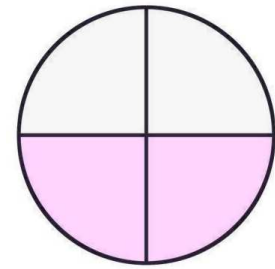


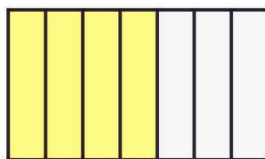


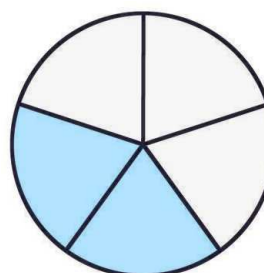










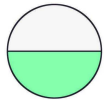




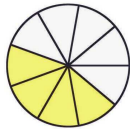




LÖSUNG:



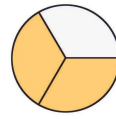
$$\frac{1}{2}$$



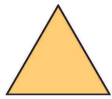
$$\frac{4}{9}$$



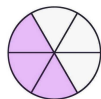
$$\frac{4}{5}$$



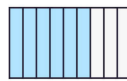
$$\frac{1}{3}$$



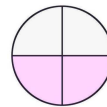
$$\frac{1}{1} = 1$$



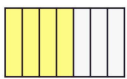
$$\frac{3}{6}$$



$$\frac{6}{9}$$




$$\frac{2}{4}$$



$$\frac{4}{7}$$



$$\frac{2}{5}$$



$$\frac{3}{4}$$



$$\frac{10}{14}$$

Weitere anspruchsvolle Proben für das Fach Mathematik für alle Schularten und Klassen findest Du auf unserer Partnerseite www.CATLUX.de. Dort gibt es ausführliche Musterlösungen, Proben, Lernzielkontrollen, Schulaufgaben und Klassenarbeiten für alle Schularten, Klassen und Fächer, passend zum aktuellen LehrplanPLUS.