
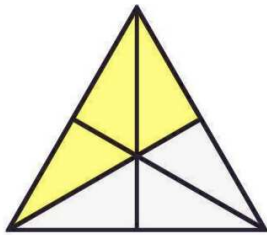


# Arbeitsblatt für das Fach Mathe

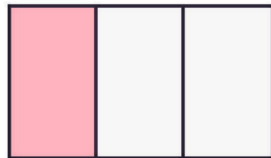
Brüche  
Bruchteile (Teil 2)



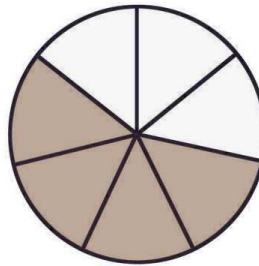
Schreibe die farbige Fläche als einen Bruch des Ganzen!



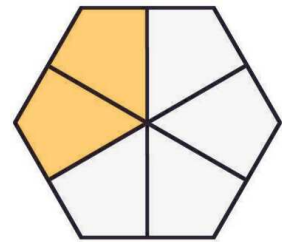
\_\_\_\_\_



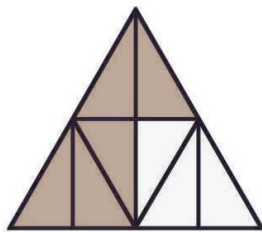
\_\_\_\_\_



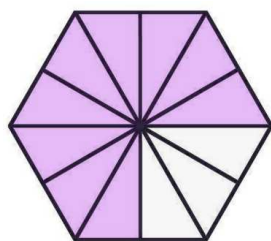
\_\_\_\_\_



\_\_\_\_\_



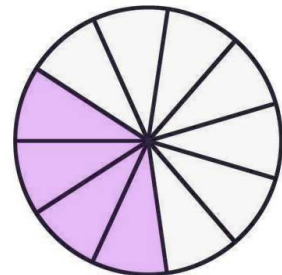
\_\_\_\_\_



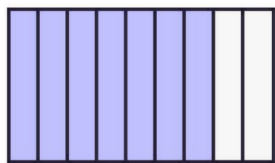
\_\_\_\_\_



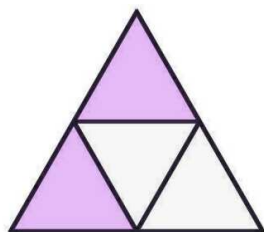
\_\_\_\_\_



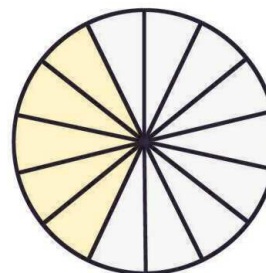
\_\_\_\_\_



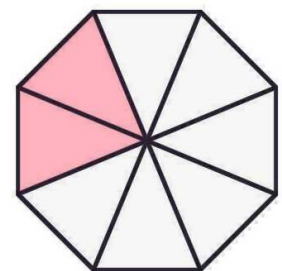
\_\_\_\_\_



\_\_\_\_\_



\_\_\_\_\_

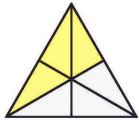


\_\_\_\_\_

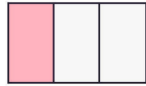
Weitere anspruchsvolle Proben für das Fach Mathematik für alle Schularten und Klassen findest Du auf unserer Partnerseite [www.CATLUX.de](http://www.CATLUX.de). Dort gibt es ausführliche Musterlösungen, Proben, Lernzielkontrollen, Schulaufgaben und Klassenarbeiten für alle Schularten, Klassen und Fächer, passend zum aktuellen LehrplanPLUS.



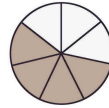
# LÖSUNG:



$$\frac{3}{6}$$



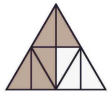
$$\frac{1}{3}$$



$$\frac{4}{7}$$



$$\frac{2}{6}$$



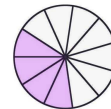
$$\frac{5}{8}$$



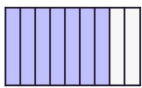
$$\frac{9}{12}$$



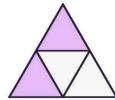
$$\frac{1}{1} = 1$$



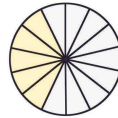
$$\frac{4}{11}$$



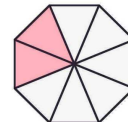
$$\frac{7}{9}$$



$$\frac{2}{4}$$



$$\frac{5}{14}$$



$$\frac{2}{8}$$