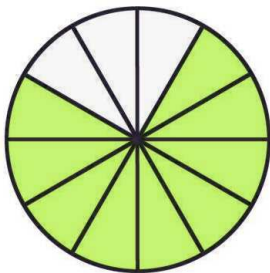
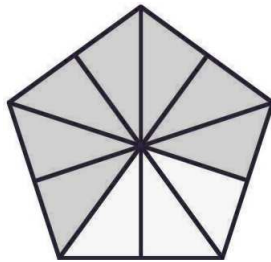



Schreibe die farbige Fläche als einen Bruch des Ganzen!



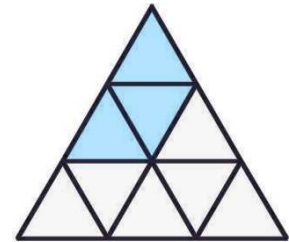
\_\_\_\_\_




\_\_\_\_\_




\_\_\_\_\_



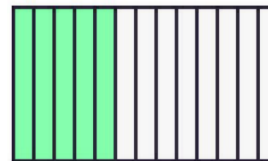
\_\_\_\_\_



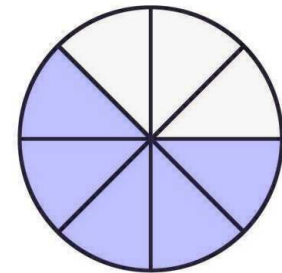
\_\_\_\_\_



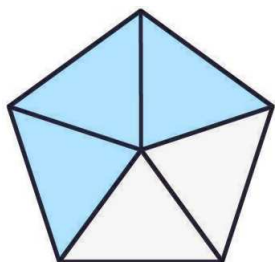
\_\_\_\_\_



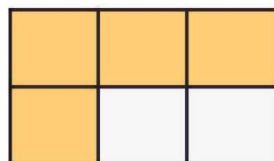
\_\_\_\_\_



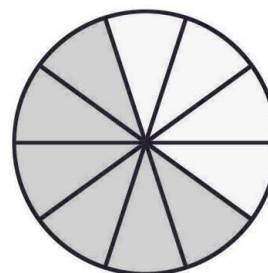
\_\_\_\_\_



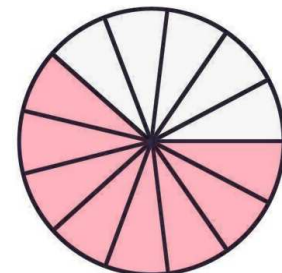
\_\_\_\_\_



\_\_\_\_\_



\_\_\_\_\_



\_\_\_\_\_

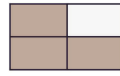
# LÖSUNG:



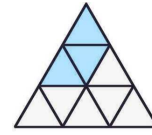
$$\frac{9}{12}$$




$$\frac{7}{10}$$




$$\frac{3}{4}$$



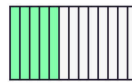
$$\frac{3}{9}$$



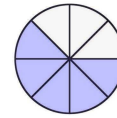
$$\frac{1}{1} = 1$$



$$\frac{1}{2}$$



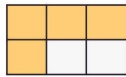
$$\frac{5}{13}$$



$$\frac{5}{8}$$



$$\frac{3}{5}$$



$$\frac{4}{6}$$



$$\frac{6}{10}$$



$$\frac{8}{13}$$

Weitere anspruchsvolle Proben für das Fach Mathematik für alle Schularten und Klassen findest Du auf unserer Partnerseite [www.CATLUX.de](http://www.CATLUX.de). Dort gibt es ausführliche Musterlösungen, Proben, Lernzielkontrollen, Schulaufgaben und Klassenarbeiten für alle Schularten, Klassen und Fächer, passend zum aktuellen LehrplanPLUS.